

# PART 1 — ENGLISH LANGUAGE ARTS

57 QUESTIONS

---

## REVISING/EDITING

QUESTIONS 1–9

### IMPORTANT NOTE

The Revising/Editing section (Questions 1-9) is in two parts: Part A and Part B.

---

#### REVISING/EDITING Part A

**DIRECTIONS:** Read and answer the following questions. You will be asked to recognize and correct errors so that the sentences or short paragraphs follow the conventions of standard written English. You may write in your test booklet as needed to take notes. You should re-read relevant parts of the sentences or paragraphs before marking the best answer for each question.

---

1. Read this sentence.

During a nightly news segment about a cooking contest, a reporter talked to some people who did the best in the contest.

Which revision uses the most precise language for the words *talked to some people who did the best in the contest*?

- A. conversed with some of the people who won the contest
- B. spoke to the three contestants who did well
- C. discussed the contest with some of the winners
- D. interviewed the top three contestants

2. Read this paragraph.

(1) When coal was used to heat homes, it frequently left soot stains on the walls. (2) Brothers Cleo and Noah McVicker, who owned a cleaning product company created a doughy substance to help people remove this soot. (3) Over time, as natural gas becomes more common, people had little need for soot cleansers, and the McVickers' family company struggled to stay in business. (4) Then one day Joe McVicker, Cleo's son, learned that his sister-in-law had been using the substance for art projects in her classroom, so he remarketed the product as the toy known today as Play-Doh.

Which pair of revisions need to be made in the paragraph?

- E. Sentence 1: Delete the comma after *homes*.  
Sentence 3: Change *becomes* to *became*.
- F. Sentence 1: Delete the comma after *homes*.  
Sentence 4: Change *remarketed* to **had remarketed**.
- G. Sentence 2: Insert a comma after *company*.  
Sentence 3: Change *becomes* to *became*.
- H. Sentence 2: Insert a comma after *company*.  
Sentence 4: Change *remarketed* to **had remarketed**.

3. Read this paragraph.

(1) Walking dogs, cleaning kennels, hand-feeding newborn kittens, and supporting the pet-adoption process, the animal shelter is looking for volunteers to help with a variety of tasks. (2) Working at the animal shelter is a great way for young people, especially those who aspire to care for and protect animals, to gain valuable work experience. (3) In addition to hands-on training with animal care, volunteers will learn important job skills, such as punctuality, responsibility, and personal initiative. (4) Caring for animals can also help volunteers develop empathy, which is the awareness and understanding of the feelings of others.

Which sentence contains an error in its construction and should be revised?

- A. sentence 1
- B. sentence 2
- C. sentence 3
- D. sentence 4

---

## REVISING/EDITING Part B

**DIRECTIONS:** Read the text below and answer the questions following it. You will be asked to improve the writing quality of the text and to correct errors so that the text follows the conventions of standard written English. You should re-read relevant parts of the text before marking the best answer for each question.

---

### Moving through Mountains

(1) An age-old proverb says that necessity is the mother of invention. (2) Centuries of human ingenuity in the face of obstacles prove this to be true. (3) For many years the Swiss Alps, a mountain range spanning southern Switzerland and northern Italy, were such an obstacle. (4) Roads and railways had to navigate around the mountains or through winding tunnels inside the mountains, making the transportation of people and goods difficult and time consuming. (5) In 2016 these burdens were eased with the completion of the Gotthard Base Tunnel.

(6) Construction of the high-speed railway tunnel began in 1996. (7) The tunnel was created through the use of tunnel-boring machines, which are giant drills with a flat rotating head called a cutter head. (8) Each of the tunnel-boring machines used during the construction of the tunnel was about the length of four football fields arranged end-to-end. (9) During the seventeen-year construction period, 28 million tons of rock were removed, enough to rebuild the Great Pyramid of Giza five times. (10) This massive construction project is reported to have cost \$12 billion. (11) After that, 4 million cubic meters of concrete, or enough concrete to build eighty-four Empire State Buildings, were used to construct and support the tunnel.

(12) By 2020 the high-speed railway will carry more than 250 freight trains and 55 passenger trains a day, with most traveling at speeds of around 100 to 125 miles per hour. (13) It will be faster for people to travel between northern and southern Europe. (14) The travel time between the European cities of Zurich, Switzerland, and Milan, Italy, will be reduced by an hour. (15) Many European leaders compare the Gotthard Base Tunnel to the Channel Tunnel, a 33-mile underwater tunnel that connects the United Kingdom and France. (16) While there is no roadway in the Channel Tunnel, people can drive their cars onto special trains that will carry vehicles through to the other side.

(17) Just as traffic congestion in major cities led to the construction of underground local transportation, natural formations, such as mountain ranges, have also sent people underground for faster, easier, and cheaper methods of transportation across larger areas. (18) There is renewed interest in constructing innovative methods of transportation that will help eliminate problems associated with traveling to and from certain areas.

4. Which sentence should be added after sentence 5 to introduce the main topic of the passage?
- E. The construction of the Gotthard Base Tunnel was approved by Swiss voters in 1992 and was funded by tolls, fuel taxes, and government loans.
  - F. Leaders from several European countries attended the opening ceremonies for the Gotthard Base Tunnel, a Swiss tunnel.
  - G. The Gotthard Base Tunnel is the world’s longest and deepest railway tunnel, stretching 35.5 miles straight through the base of the Swiss Alps.
  - H. The Gotthard Base Tunnel continues to help reduce the number of freight trucks on the roadways in the Swiss Alps.
5. Which sentence should be added to follow and support sentence 7?
- A. The tunnel-boring machine is helpful to tunnel builders in the modern era and has been an improvement over dynamite.
  - B. These enormous tunnel-boring machines function somewhat like a cheese grater, with the cutter head grinding slowly through rock and stone.
  - C. Engineers had considered making a tunnel under the mountains for many years, but it was impossible to do without modern tunnel-boring machines.
  - D. Different types of cutter heads are used with tunnel-boring machines depending on the geology of the area where the tunnel is being created.
6. Where should sentence 11 be moved in order to improve the organization of the second paragraph (sentences 6–11)?
- E. to the beginning of the paragraph (before sentence 6)
  - F. between sentences 6 and 7
  - G. between sentences 8 and 9
  - H. between sentences 9 and 10
7. Which sentence presents information that shifts away from the main topic of the third paragraph (sentences 12–16) and should be removed?
- A. sentence 13
  - B. sentence 14
  - C. sentence 15
  - D. sentence 16

8. Which transition phrase should be added to the beginning of sentence 18?
- E. Although the Gotthard Base Tunnel is mainly for freight trains
  - F. With the Gotthard Base Tunnel taking ten years to complete
  - G. Because of the successful completion of the Gotthard Base Tunnel
  - H. As the number of trains using the Gotthard Base Tunnel increases
9. Which concluding sentence should be added after sentence 18 to support the topic presented in the passage?
- A. There is proof that underground tunnels such as the Gotthard Base Tunnel are beneficial to the economy of the surrounding area.
  - B. The Gotthard Base Tunnel is an extraordinary example of how human ingenuity and persistence can overcome great obstacles.
  - C. The completion of the Gotthard Base Tunnel shows that people can work together to achieve important goals.
  - D. The Swiss government is confident that the economic impact of the Gotthard Base Tunnel will be worth its construction cost.

---

# READING COMPREHENSION

## QUESTIONS 10–57

**DIRECTIONS:** Read each of the following six texts, and answer the related questions. You may write in your test booklet as needed to take notes. You should re-read relevant parts of each text before marking the best answer for each question. Base your answers only on the content within the text.

---

CONTINUE ON TO THE NEXT PAGE ►

## An Early Warning

- 1 One of the books that has done the most to alert the world to the dangers of environmental degradation is George Perkins Marsh's *Man and Nature*. Its message—that Western society is in the process of causing irreparable harm to the environment—greatly influenced ecologists during the beginning of the modern environmentalist movement in the 1960s. Marsh was not, however, part of this movement. Surprisingly, *Man and Nature* was first published in 1864.
- 2 Marsh first observed the environmentally destructive effects of human activities while growing up in Vermont in the early nineteenth century. The heavy demand for firewood had depleted the forests, and extensive sheep grazing had stripped the land. The result was flooding and soil erosion. Furthermore, streams were fouled by wastes dumped from numerous mills and dye houses.
- 3 Much later in his life, after careers in law, business, farming, and politics, Marsh served as ambassador to Italy. There he noticed land abuse similar to what he had seen in Vermont. Overgrazing and forest mismanagement had rendered areas that had been productive farmland since the days of the Roman Empire desolate. Marsh attributed this to what he called “man’s ignorant disregard for the laws of nature.”
- 4 In Italy, Marsh began to organize his observations and theories. He wrote in a way intended to educate readers about the impact of industrial and agricultural practices on the environment. In *Man and Nature*, he evaluated the important relationships between animals and plants, discussed forestry practices in great detail, and analyzed the ways natural water supplies are affected by human use.
- 5 *Man and Nature* challenged the popular belief that nature can heal any damage that people inflict upon it. Marsh argued that people may use and enjoy, but not destroy, the riches of the earth.
- 6 Furthermore, he asserted that everything in nature is significant and that even the tiniest organism affects the fragile environmental balance. His belief that drastic alteration of this balance would be dangerous is now accepted as a fundamental principle of modern environmental science.
- 7 Although he pointed out environmental damage caused by irresponsible human activities, Marsh did not oppose every human alteration to the environment. To him, the goal was proper management, not a return to wilderness conditions. People should consider the consequences of their actions, he wrote, and become “co-worker[s] with nature.” Marsh praised the Suez Canal, the human-made waterway between the Mediterranean Sea and the Gulf of Aden, as “the greatest and most truly cosmopolite physical improvement ever undertaken by man.” He believed that the advantages of the canal—improved transportation and commerce—would outweigh any environmental damage. Yet he also warned of possible unintended consequences, such as destructive plants and animals spreading from one body of water to the other.
- 8 Marsh was considered a radical thinker during his lifetime. By the late nineteenth century, however, his writings, along with those of John Muir, Henry David Thoreau, and others, had inspired what became known as the conservation movement. The conservationists of that time sought to educate the public that wilderness areas were worth preserving and were responsible for creating the National Park Service and the National Forest Service.

10. Which statement best describes the central idea of the passage?
- E. Marsh’s experience growing up on a farm allowed him to witness firsthand how human demands on nature can lead to problems, and as an adult he wrote one of the first books about conservation.
  - F. Marsh challenged the notion that nature can repair the damage people cause to it, but he also supported human-made modifications to nature that improve transportation and commerce.
  - G. Marsh’s ideas about the environment were considered radical in his lifetime, but they later gained popularity during the environmental movement in the twentieth century.
  - H. Marsh was a radical thinker who believed that people’s actions could dramatically affect nature, and his writings are considered foundational to the conservation movement.
11. Marsh believed that the people of his time caused harm to the environment because
- A. they assumed that future generations would solve any environmental problems.
  - B. they thought industrial progress was more important than protecting nature.
  - C. they were unwilling to change farming and waste-disposal practices.
  - D. they lacked knowledge of nature and natural processes.
12. What is the most likely reason the author uses the word “surprisingly” in paragraph 1?
- E. to argue that Marsh’s ideas are more applicable in the present than they were during his lifetime
  - F. to show that Marsh introduced ideas a century before they became widely accepted
  - G. to emphasize that Marsh was unaware that his ideas would help begin a conservation movement
  - H. to prove that there would be fewer issues with the environment today if people had accepted Marsh’s ideas earlier
13. Which evidence supports the accuracy of Marsh’s theories about nature?
- A. the details about Marsh’s observations of environmental degradation
  - B. the details about how Marsh’s writing inspired a conservation movement
  - C. the details about how Marsh’s ideas are essential to modern environmental science
  - D. the details about Marsh’s opinions on human alterations to the environment



14. Which detail about Marsh provides support for the author's statement in paragraph 5?
- E. his reputation as a radical thinker
  - F. his contribution to the conservation movement
  - G. his experience working as an ambassador
  - H. his approval of beneficial human-made projects in nature
15. Which of Marsh's ideas most influenced the environmental movement of the 1960s?
- A. Some human alterations to the environment are necessary.
  - B. People lack an understanding of the environment.
  - C. Human activities could damage the environment.
  - D. Environmental degradation has been occurring for many years.

CONTINUE ON TO THE NEXT PAGE ►

## Champion of the Channel

- 1 In 1926 an editor at the *London Daily News* predicted that Gertrude Ederle, an American swimmer with eighteen world records and three Olympic medals, would fail in her attempt to swim across the English Channel. He claimed that “even the most uncompromising champion of the rights and capacities of women must admit that in contests of physical skill, speed and endurance they must remain forever the weaker sex.” Yet, at only nineteen years old, Ederle not only became the first woman to accomplish this feat, she also broke the men’s record by two hours. Gertrude Ederle’s triumphant swim across the English Channel was a testimony to her determination, innovative spirit, and passion for swimming.
- 2 Crossing the English Channel is a daunting task for any swimmer. At its narrowest point, the channel measures twenty-one miles across. Its icy waters hover around sixty degrees Fahrenheit, and its unruly tides and currents toss swimmers about like bobbing corks. Stinging jellyfish, seaweed, and floating debris from shipwrecks and lost cargoes present added hazards.
- 3 For decades the channel’s perils have defeated countless swimmers. Ederle, too, failed in her first attempt to cross the channel in 1925. Just six miles short of finishing, she became ill, and her coach had to haul her out of the water. Undeterred, Ederle decided to try again. Ederle knew that if she did not complete the challenge this time, she might never get the opportunity to set this record, because a rival female swimmer was preparing to make her second attempt at the crossing as well.
- 4 To prepare for the marathon swim, Ederle found ways to improve her equipment. She and her sister Meg discovered that melted candle wax perfectly sealed goggle edges, effectively waterproofing Ederle’s goggles against hammering waves. The sisters also designed a two-piece silk swimsuit for Ederle. During her first channel-crossing attempt she had worn a standard one-piece swimsuit that, after the lengthy hours of swimming across the channel, had stretched out, filling with water and creating drag, making an already challenging task almost insurmountable. Unlike the cumbersome typical bathing suit, this silk invention weighed little and allowed for easy movement.
- 5 On August 6, 1926, Ederle waded into the channel near Cape Gris-Nez, France. At first she shivered in the bone-chilling water even though she had covered her body in eight layers of grease for insulation. Her limbs felt stiff. Her strokes were irregular. Driving forward, she fought to clear her mind and find what she called her “sphere,” a place where the sea became her only companion and the shrieks of gulls and the humming of boat engines faded away. Using a new overhand stroke called the American crawl, Ederle eventually settled into a steady pace, briskly breaking through waves.
- 6 Throughout Ederle’s swim, two tugboats accompanied her. One carried newspaper reporters who wired dispatches of her progress to shore. The other, displaying a sign that read “This way, ole kid!” with an arrow pointing forward, transported her coach, family, and friends. Her coach played songs, such as “Yes, We Have No Bananas,” on a phonograph so that Ederle could time her strokes to the rhythm. Using a net, her coach also passed her baby bottles of broth for nourishment.
- 7 For hours Ederle swam, dodging debris with an amused smile. However, as she neared the English shore, a sudden fierce storm erupted. The tides and waves forced Ederle backward, and she fought the stubborn swells for several hours. The salty water caused her tongue to swell and inflamed her ears. Yet Ederle felt indescribably happy as she churned through the sea. Finally, as she neared the English shore, the storm abated, and the tide turned. No longer fighting against her, the sea pushed her toward the shore and victory.

- 8 After fourteen hours and thirty-one minutes, Ederle, on wobbly legs, stepped onto the English shore. The waiting crowd roared, honked their automobile horns, blasted their tugboat whistles, and set off flares that flashed in the sky. Ederle had swum into history.
- 9 When Ederle returned to New York, she received a parade, where thousands of people shouted “Trudy!” Not only were everyday American citizens proud of Ederle, but she also inspired them to be more active. Over the next few years, more than 60,000 people credited her with motivating them to earn their American Red Cross swimming certificates. Gertrude Ederle’s accomplishment proved to the world that with determination and passion, it was possible for a person to achieve his or her goals.

SOLO SWIMS ACROSS THE ENGLISH CHANNEL

Earliest Speed Records		
Year	Swimmer	Time
1875	Matthew Webb (M)	21 hours, 45 minutes
1923	Enrico Tiraboschi (M)	16 hours, 33 minutes
1926	Gertrude Ederle (F)	14 hours, 31 minutes
1926	Arnst Vierkotter (M)	12 hours, 38 minutes
Current Speed Records		
Year	Swimmer	Time
2012	Trent Grimsey (M)	6 hours, 55 minutes
2006	Yvetta Hlavacova (F)	7 hours, 25 minutes

16. Read this sentence from paragraph 1.

**In 1926 an editor at the *London Daily News* predicted that Gertrude Ederle, an American swimmer with eighteen world records and three Olympic medals, would fail in her attempt to swim across the English Channel.**

What does the editor’s comment reveal about the challenges Ederle faced in attempting her feat?

- E. Regardless of her ability, being an American put Ederle at a serious disadvantage over a Londoner, who would be more familiar with the English Channel.
- F. At the time, Ederle still needed more training in order to succeed in the daunting task of swimming the English Channel.
- G. While Ederle could participate in athletic competition, some people were not comfortable with her attempt to swim the channel because no woman had ever attempted it before.
- H. In spite of her previous achievements, Ederle still experienced social as well as physical obstacles in attempting to swim the channel.

17. Which sentence is the best summary of the steps that Ederle took to prepare for her second attempt to swim across the English Channel?
- A. Working with her sister, Ederle waterproofed her goggles using melted candle wax to seal the edges and designed a two-piece silk bathing suit that was lightweight and would not stretch out during the long swim.
  - B. Ederle covered her body in numerous layers of grease for insulation and focused on finding her “sphere” during her swim.
  - C. Ederle began training with her coach, who played music while she swam to help her time her strokes to the music.
  - D. Ederle focused on developing better equipment than the standard swimsuit that proved cumbersome during her first attempt to cross the channel.
18. Read this sentence from paragraph 3.

**Ederle knew that if she did not complete the challenge this time, she might never get the opportunity to set this record, because a rival female swimmer was preparing to make her second attempt at the crossing as well.**

How does this sentence fit into the overall structure of the passage?

- E. It emphasizes that Ederle’s attempt to swim across the channel led other female swimmers to attempt the challenge.
  - F. It presents the reason why Ederle prepared to cross the channel again immediately after her initial failure.
  - G. It shows Ederle’s realization that she had to rethink her methods if she wanted to be the first woman to cross the channel.
  - H. It indicates that Ederle had learned from her mistakes and was working to fix them before her next attempt.
19. Which sentence best supports the idea that Ederle succeeded in swimming across the channel because of her innovative approach to the challenge?
- A. “Yet, at only nineteen years old, Ederle not only became the first woman to accomplish this feat, she also broke the men’s record by two hours.” (paragraph 1)
  - B. “At first she shivered in the bone-chilling water even though she had covered her body in eight layers of grease for insulation.” (paragraph 5)
  - C. “Using a new overhand stroke called the American crawl, Ederle eventually settled into a steady pace, briskly breaking through waves.” (paragraph 5)
  - D. “No longer fighting against her, the sea pushed her toward the shore and victory.” (paragraph 7)

20. In paragraph 4, the word “insurmountable” is used to highlight
- E. how the bathing suit made it impossible for Ederle to make it across the channel.
  - F. how Ederle and her sister decided to improve Ederle’s swimming equipment in a creative way.
  - G. that the flaws in Ederle’s bathing suit made a difficult task even more complicated.
  - H. that the swimming equipment Ederle used needed to be custom made for her attempt.
21. Which statement describes how the author’s use of problem-and-solution in paragraph 5 contributes to the development of ideas in the passage?
- A. Detailing the challenges that the cold channel waters presented highlights how effective Ederle’s training was.
  - B. Describing Ederle’s physical difficulties during her swim provides evidence of the team effort required in order to ensure her safety.
  - C. Explaining the difficulties that arose early in the effort helps predict the additional problems that occurred during Ederle’s attempt.
  - D. Illustrating Ederle’s process of blocking out her discomfort shows that swimming the channel was both a mental and a physical challenge.
22. Paragraph 7 contributes to the development of the central idea of the passage by
- E. illustrating that Ederle’s physical strength and mental fortitude allowed her to stay focused on her goal.
  - F. conveying that Ederle pushed herself to the edge of her physical capabilities in order to complete the swim.
  - G. highlighting the impact the severe weather had on Ederle’s emotions during her swim.
  - H. emphasizing the surge of emotions Ederle felt as she came closer to achieving a personal goal.
23. Ederle’s victorious swim across the English Channel influenced American attitudes mainly by
- A. sparking interest in physical activity and in seeking swimming certification.
  - B. encouraging other swimmers to seek out and achieve challenging feats.
  - C. demonstrating that women could achieve and even surpass feats accomplished by men.
  - D. showing that determination and perseverance are necessary to overcome previous failures.

24. Which sentence from the passage best conveys the author’s perspective regarding the impact of Ederle’s accomplishment?
- E. “Gertrude Ederle’s triumphant swim across the English Channel was a testimony to her determination, innovative spirit, and passion for swimming.” (paragraph 1)
  - F. “For hours Ederle swam, dodging debris with an amused smile.” (paragraph 7)
  - G. “Yet Ederle felt indescribably happy as she churned through the sea.” (paragraph 7)
  - H. “Ederle had swum into history.” (paragraph 8)
25. The table contributes to the development of the topic of the passage mainly by
- A. emphasizing that people have continued to swim across the channel and have significantly reduced the speed record.
  - B. suggesting that Ederle inspired women to swim across the channel in an attempt to break the current speed record.
  - C. revealing that Ederle is not the only woman who has set a record time for swimming across the English Channel.
  - D. providing a comparison between channel-swimming records of the early twentieth century and current records.

CONTINUE ON TO THE NEXT PAGE ►



## Excerpt from *A Tramp Abroad*

by Mark Twain

- 1 Now and then, while we<sup>1</sup> rested, we watched the laborious ant at his work. I found nothing new in him—certainly nothing to change my opinion of him. It seems to me that in the matter of intellect the ant must be a strangely overrated bird. During many summers now I have watched him, when I ought to have been in better business, and I have not yet come across a living ant that seemed to have any more sense than a dead one. I refer to the ordinary ant, of course; I have had no experience of those wonderful Swiss and African ones which vote, keep drilled armies, . . . and dispute about religion. Those particular ants may be all that the naturalist paints them, but I am persuaded that the average ant is a sham.
- 2 I admit his industry, of course; he is the hardest working creature in the world—when anybody is looking—but his leather-headedness is the point I make against him. He goes out foraging, he makes a capture, and then what does he do? Go home? No; he goes anywhere but home. He doesn't know where home is. His home may be only three feet away; no matter, he can't find it. He makes his capture, as I have said; it is generally something which can be of no sort of use to himself or anybody else; it is usually seven times bigger than it ought to be; he hunts out the awkwardest place to take hold of it; he lifts it bodily up in the air by main force, and starts—not toward home, but in the opposite direction; not calmly and wisely, but with a frantic haste which is wasteful of his strength; he fetches up against a pebble, and, instead of going around it, he climbs over it backwards, dragging his booty after him, tumbles down on the other side, jumps up in a passion, kicks the dust off his clothes, moistens his hands, grabs his property viciously, yanks it this way, then that, shoves it ahead of him a moment, turns tail and lugs it after him another moment, gets madder and madder, then presently hoists it into the air and goes tearing away in an entirely new direction; comes to a weed; it never occurs to him to go around it. No; he must climb it, and he does climb it, dragging his worthless property to the top—which is as bright a thing to do as it would be for me to carry a sack of flour from Heidelberg to Paris by way of Strasburg steeple; when he gets up there he finds that that is not the place; takes a cursory glance at the scenery, and either climbs down again or tumbles down, and starts off once more—as usual, in a new direction. At the end of half an hour he fetches up within six inches of the place he started from, and lays his burden down. Meantime, he has been over all the ground for two yards around, and climbed all the weeds and pebbles he came across. Now he wipes the sweat from his brow, strokes his limbs, and then marches aimlessly off, in as violent a hurry as ever. He traverses a good deal of zig-zag country, and by and by stumbles on his same booty again. He does not remember to have ever seen it before; he looks around to see which is not the way home, grabs his bundle, and starts. He goes through the same adventures he had before; finally stops to rest, and a friend comes along.
- 3 Evidently the friend remarks that a last year's grasshopper leg is a very noble acquisition, and inquires where he got it. Evidently the proprietor does not remember exactly where he did get it, but thinks he got it "around here somewhere." Evidently the friend contracts to help him freight it home. Then, with a judgment peculiarly antic (pun not intentional), they take hold of opposite ends of that grasshopper leg and begin to tug with all their might in opposite directions. Presently they take a rest, and confer together. They decide that something is wrong, they can't make out what. Then they go at it again, just as before. Same result. Mutual recriminations follow. Evidently each accuses the other of

---

<sup>1</sup>**we:** the author and his fictional travel companion

being an obstructionist. They warm up, and the dispute ends in a fight. They lock themselves together and chew each other's jaws for a while; then they roll and tumble on the ground till one loses a horn or a leg and has to haul off for repairs. They make up and go to work again in the same old insane way, but the crippled ant is at a disadvantage; tug as he may, the other one drags off the booty and him at the end of it. Instead of giving up, he hangs on, and gets his shins bruised against every obstruction that comes in the way. By and by, when that grasshopper leg has been dragged all over the same old ground once more, it is finally dumped at about the spot where it originally lay. The two perspiring ants inspect it thoughtfully and decide that dried grasshopper legs are a poor sort of property after all, and then each starts off in a different direction to see if he can't find an old nail or something else that is heavy enough to afford entertainment and at the same time valueless enough to make an ant want to own it. . . .

- 4 Science has recently discovered that the ant does not lay up anything for winter use. . . . He does not work, except when people are looking, and only then when the observer has a green, naturalistic look, and seems to be taking notes. This amounts to deception, and will injure him for the Sunday schools. He has not judgment enough to know what is good to eat from what isn't. This amounts to ignorance, and will impair the world's respect for him. . . . He cannot stroll around a stump and find his way home again. This amounts to idiocy, and once the damaging fact is established, thoughtful people will cease to look up to him. It is strange beyond comprehension that so manifest a humbug as the ant has been able to fool so many nations and keep it up so many ages without being found out.

From A TRAMP ABROAD by Mark Twain—Public Domain

26. The phrase “those wonderful Swiss and African ones which vote, keep drilled armies, . . . and dispute about religion” in paragraph 1 shows that the author
- E. believes that the behavior of the ants is reflected in other living creatures.
  - F. acknowledges that his observations of a few do not necessarily apply to all.
  - G. knows that disproving a commonly held belief is challenging.
  - H. accepts that there are flaws in his interpretation of the behavior of the ants.
27. The central idea that “the average ant is a sham” (paragraph 1) is conveyed mainly through the
- A. comical descriptions of the inability of the ants to accomplish the task at hand.
  - B. comparison between ants from other countries and the ants being observed.
  - C. keen observations that the level of intelligence of ants is mostly overstated.
  - D. conclusion that ants value objects that are of little practical use to them.

28. In paragraph 2, how do the words “grabs,” “yanks,” and “tearing away” contribute to the meaning of the excerpt?
- E. They highlight the ant’s belief that his work is important.
  - F. They illustrate that the ant is more efficient working on his own.
  - G. They indicate the speed with which the ant completes his tasks.
  - H. They emphasize the ant’s anxious efforts to be productive.

29. Read this text from paragraph 2.

**He . . . comes to a weed; it never occurs to him to go around it. No; he must climb it, and he does climb it, dragging his worthless property to the top—which is as bright a thing to do as it would be for me to carry a sack of flour from Heidelberg to Paris by way of Strasburg steeple;**

These details convey the central idea in the excerpt by showing that the ant

- A. often wastes his strength when working on a task.
  - B. is surprised by the effort he needs in order to move the object.
  - C. is oblivious to the most practical solution to his problem.
  - D. focuses more on obtaining the object than getting it back home efficiently.
30. Which of the following best explains the author’s fascination with the ants?
- E. “During many summers now I have watched him, when I ought to have been in better business, and I have not yet come across a living ant that seemed to have any more sense than a dead one.” (paragraph 1)
  - F. “I admit his industry, of course; he is the hardest working creature in the world—” (paragraph 2)
  - G. “Science has recently discovered that the ant does not lay up anything for winter use.” (paragraph 4)
  - H. “It is strange beyond comprehension that so manifest a humbug as the ant has been able to fool so many nations and keep it up so many ages without being found out.” (paragraph 4)

31. Read this sentence from paragraph 2.

**At the end of half an hour he fetches up within six inches of the place he started from, and lays his burden down.**

How does the sentence contribute to the development of the central idea of the excerpt?

- A. It reveals that the ant is aware of the purposelessness of his efforts and that he does not enjoy his work.
- B. It highlights how little the ant accomplishes despite the great amount of effort he exerts.
- C. It suggests that the ant has an industrious attitude and does not easily give up.
- D. It emphasizes that the ant does not thoughtfully consider how difficult it would be to carry his capture for such a long period of time.

32. Which sentence from paragraph 2 best supports the idea that sheer “leather-headedness” (paragraph 2) amounts to “ignorance” and “idiocy” (paragraph 4)?

- E. “He goes out foraging, he makes a capture, and then what does he do?”
- F. “He lifts it bodily up in the air by main force,”
- G. “When he gets up there he finds that that is not the place,”
- H. “Now he wipes the sweat from his brow, strokes his limbs, and then marches aimlessly off, in as violent a hurry as ever.”

33. Read this sentence from paragraph 3.

**Evidently the friend remarks that a last year’s grasshopper leg is a very noble acquisition, and inquires where he got it.**

Which statement best describes how the sentence fits into the overall structure of the excerpt?

- A. It indicates a shift to the realization that the ants place great importance on an item that has little value.
- B. It emphasizes a shift from an analysis of the actions of the individual ant to a commentary on the actions of the ants working together.
- C. It introduces a transition to the idea that specific observations about one ant allow for generalizations about all ants.
- D. It provides a transition to the observation that the ant’s friend is just as purposeful in his efforts toward a futile ending as the first ant.

34. Read this sentence from paragraph 3.

**The two perspiring ants inspect it thoughtfully and decide that dried grasshopper legs are a poor sort of property after all, and then each starts off in a different direction to see if he can't find an old nail or something else that is heavy enough to afford entertainment and at the same time valueless enough to make an ant want to own it.**

How does the word choice in the sentence contribute to the overall meaning of the excerpt?

- E. It creates a humorous critique of the ants' intense attitude toward their pointless work.
  - F. It illustrates the ants' confusion over their lack of positive results compared with their level of effort.
  - G. It highlights the ants' frustration as they repeatedly chose a difficult task over one that could be accomplished more easily.
  - H. It illustrates the ants' stubborn determination to hold on to the worthless object.
35. How does the presence of the friend in paragraph 3 influence the first ant's behavior?
- A. The friend distracts the ant from finding the correct path home.
  - B. The friend inspires the ant to consider a new approach to the situation.
  - C. The friend encourages the ant to continue his worthless efforts.
  - D. The friend tries to prevent the ant from finishing his task.

CONTINUE ON TO THE NEXT PAGE ►

## Ruins of a Fabled City

- 1 The African country of Zimbabwe took its name from the Shona word meaning “stone enclosures” or “venerated houses.” In fact, today dozens of stone ruins are scattered throughout Zimbabwe and other areas in southeastern Africa. One of these ruins, known as Great Zimbabwe, was once a fabled city that inspired tales that circulated throughout Europe. Where was this remarkable city, and who had built it? For centuries the mystery occupied the minds of explorers and treasure seekers.
- 2 The first reports to Europeans of Great Zimbabwe were spread a thousand years ago by Arab traders sailing between the Middle East and the east coast of Africa. The traders told of the fabulous wealth of a mysterious stone city in the African interior. In the trader’s tales, that city became associated with the Europeans’ understanding of Middle Eastern history—the Queen of Sheba, King Solomon and his legendary gold mines, long since lost to the world. By the sixteenth century, Portuguese explorers regularly visited East Africa, searching for King Solomon’s gold, but they never found Great Zimbabwe. In 1552, a Portuguese historian, João de Barros, recorded a story told by Arabs about a city with a “square fortress of masonry within and without, built of stones of marvelous size, and there appears to be no mortar joining them.”
- 3 In fact, Great Zimbabwe *was* a marvel. In one area a massive wall more than thirty feet high and twenty feet thick created a great enclosure. Another area contained a fortress-like series of walls, corridors, and steps built into the bluff that overlooks the ruins. Throughout the city, each stone was precisely fitted to the others without the use of mortar.
- 4 In the 1870s Karl Mauch, a German geologist, was the first European to see Great Zimbabwe, by then in ruins. Mauch realized that he had “rediscovered” the fabled city from de Barros’s story. He jumped to the conclusion that Great Zimbabwe had been built by the Queen of Sheba. British authorities sent a British journalist, Richard Hall, to Great Zimbabwe to investigate Mauch’s report. Archaeology was still in its infancy, and Hall, convinced that the structures had been built by ancient people from the Middle East, dug up and discarded archaeological deposits that would have revealed much about the true history of Great Zimbabwe. Later European excavations destroyed even more valuable evidence.
- 5 In the twentieth century, after excavating areas that had not been disturbed, David Randall-MacIver, a Scottish Egyptologist, and Gertrude Caton-Thompson, an English archaeologist, concluded that the ruins were unmistakably African in origin. Great Zimbabwe was most likely built during the fourteenth or fifteenth century by the ancestors of the present-day Shona people. Recent carbon-14 dating supports their conclusion. Great Zimbabwe was once home to an estimated 20,000 people, the center of a great Shona kingdom. Wealthy Shona kings traded their ivory and gold in coastal towns for other goods, thus accounting for the discovery of beads and other foreign wares in the ruins.
- 6 One mystery of Great Zimbabwe had been solved. Another mystery remains: why was the settlement at Great Zimbabwe abandoned, leaving the magnificent stone architecture to fall into ruins?

36. Which statement best describes the central idea of the passage?
- E. Great Zimbabwe was an enormous stone city thought to be home to some of the greatest treasure of ancient history.
  - F. Mysteries related to Great Zimbabwe continue to interest historians and explorers even though archaeologists have confirmed its origins.
  - G. The history of Great Zimbabwe was subject to much speculation until modern archaeologists definitively determined its origins.
  - H. Early missteps in the study and excavation of the Great Zimbabwe ruins led to the loss of valuable evidence about the city.
37. What was the main way that Karl Mauch’s conclusions about Great Zimbabwe in paragraph 4 affected later archaeological investigations?
- A. Archaeologists from all over Europe became interested in excavating the area.
  - B. Archaeologists made assumptions about the history of the ruins before excavating.
  - C. Archaeologists started to believe that many of the past accounts recorded about the ruins were true.
  - D. Archaeologists realized it was unlikely that an ancient culture could build such grand structures.
38. Which statement best describes Portuguese explorers’ experience searching for Great Zimbabwe?
- E. They routinely visited East Africa but never located the city.
  - F. They were motivated by the hope of finding a mysterious city.
  - G. They used details from de Barros’s story in order to determine the city’s exact location.
  - H. They studied history books in order to gather information about the city.
39. What was “one mystery of Great Zimbabwe” (paragraph 6) that had been solved?
- A. why the settlement was abandoned
  - B. where the ivory and gold from the city went
  - C. why the ruins remained undiscovered until the 1870s
  - D. who had built the settlement



40. Which statement about the Shona people is best supported by the passage?
- E. They live along the east coast of Africa.
  - F. They are descendants of the people who built Great Zimbabwe.
  - G. They lived in the Middle East before settling in Africa.
  - H. They were once ruled by King Solomon and the Queen of Sheba.
41. The conclusions of David Randall-MacIver and Gertrude Caton-Thompson were significant because they
- A. proved that Great Zimbabwe was much older than previously thought.
  - B. questioned why the Shona people left Great Zimbabwe.
  - C. supported the idea that the ancient Shona had a robust society at Great Zimbabwe.
  - D. revealed that Great Zimbabwe was African in origin.

CONTINUE ON TO THE NEXT PAGE ►

## Cross-Purposes

What I am is *built*: concrete and steel.  
I defy gravity. I am what every athlete  
wants: to remain at the apex of the leap,  
up in the air. And yet I am useful, too:  
5 cars, trucks, people, even trains  
make their way across my broad back.  
Swallows and ospreys<sup>1</sup> nest in my trusses.

*What I am is motion. I am water, and I am older  
than anything else you know. No human  
10 built me. I am gravity's best friend; I pool  
and flow wherever gravity takes me.  
I am the blood flowing in the runner's chest,  
and I catch everything: from the hills,  
the mountains. It all washes down through me.*

15 What you are is an *accident*,  
what happens to rain when rain gives in  
to Earth's gravitational pull.  
You are some tears dribbling from a mountain's  
eye, running down the pavements  
20 of small towns, into the cities, to the sea.  
You are the path of least resistance.

*What I am is power. You, of course,  
have none: you are a static lump, an artifact  
slowly decaying. But my regal flow  
25 nourishes grasses, permits empires to rise.  
Those who made you will break you,  
in time, replacing you with yet another  
clumsy structure. I have seen. I know.*

“Clumsy”? Being rebuilt makes me  
30 a friend of time, does it not? And it means  
that I have siblings—those “clumsy” structures,  
my sisters and brothers.  
We stitch across the rip you make.  
We are steel thread to the human needle.  
35 We bind you up. We sew you.

---

<sup>1</sup>ospreys: large birds

*And I sow into you; in every cranny  
of your superstructure my vapors cling.  
They bring out your softness, your rust.  
Boast your best, and boast better yet.  
40 I am listening to the bright hum  
of the wind in your wires. Because I am,  
above all else, patient. I will wait for you.*

42. How does the similar construction of the sentence in line 1 and the sentence in line 8 contribute to the meaning of the poem?
- E. It introduces the intended permanence of the structure and the ever-changing fluidity of the water.
  - F. It shows that the structure can bridge the gap caused by the water.
  - G. It suggests that the structure has more limitations than the water.
  - H. It contrasts the stability of the structure with the instability of the water.
43. Read lines 2–4 and lines 12–14 from the poem.

**I am what every athlete  
wants: to remain at the apex of the leap,  
up in the air.**

*I am the blood flowing in the runner's chest,  
and I catch everything: from the hills,  
the mountains.*

How do the lines contribute to the development of a central idea of the poem?

- A. They establish that both the structure and the water have endurance and control.
  - B. They highlight that both the structure and the water are powerful and impressive.
  - C. They suggest that the structure and the water are unaware of how similar they are.
  - D. They reveal that the structure and the water are surprised that they are interrelated.
44. Read line 7 from the first stanza.

**Swallows and ospreys nest in my trusses.**

How does the line contribute to the development of ideas in the stanza?

- E. The line supports the structure's claim that it is beneficial to nature.
- F. The line reveals that the structure secretly envies the water's importance in nature.
- G. The line emphasizes that the structure is more valuable to nature than the water is.
- H. The line reveals the kinship that nature shares with the structure.

45. Read lines 18–20 from the poem.

**You are some tears dribbling from a mountain’s  
eye, running down the pavements  
of small towns, into the cities, to the sea.**

What impact do the phrases “some tears dribbling” and “running down” have on the meaning of the poem?

- A. They suggest that naturally flowing water is a problem in populated areas.
  - B. They highlight the different types of naturally flowing water.
  - C. They imply that the flow of water is weak and influenced by the landscape.
  - D. They highlight that the flow of water from the mountains is minimal compared with that of the seas.
46. The comparison to sewing in lines 33–35 helps show that the structure
- E. enhances the beauty of the natural landscape.
  - F. brings people together more effectively than nature does.
  - G. provides clear boundaries for natural environments.
  - H. serves as a means for people to overcome an obstacle created by nature.
47. The last stanza (lines 36–42) conveys a central idea of the poem by
- A. demonstrating that both the structure and the water depend on each other to fulfill their functions.
  - B. implying that a stronger structure would be able to resist the degradation caused by the water.
  - C. revealing that the passage of time will render both the structure and the water obsolete.
  - D. suggesting that the water will eventually weaken the structure and will continue to exist after the structure is gone.
48. Read lines 41–42 from the poem.

***Because I am,  
above all else, patient. I will wait for you.***

Which of the following supports what is implied in these lines?

- E. “*I am older / than anything else you know.*” (lines 8–9)
- F. “*No human / built me.*” (lines 9–10)
- G. “*It all washes down through me.*” (line 14)
- H. “*Those who made you will break you,*” (line 26)

49. How does the poet develop the points of view of the structure and the water?
- A. by relating a discussion between them about the future of human civilization
  - B. by narrating a debate they have over their impact on the environment
  - C. by illustrating the unique power they each possess over nature
  - D. by using personification to allow them to debate who is more important
50. How does the form of the poem contribute to its meaning?
- E. The use of an equal number of lines in each stanza emphasizes that both speakers are equally important.
  - F. The use of italics in some of the stanzas indicates the increasing tension between the structure and the water.
  - G. The alternating positions of the stanzas highlight the opposing points of view of the speakers.
  - H. The lack of a regular rhyme scheme or meter reflects the way the water changes the structure and the way the water itself changes.

## The Year without a Summer

- 1 The eruption of the Philippine volcano Mount Pinatubo in June 1991 sent a huge cloud of gas and dust encircling the globe. The dust and ash from Mount Pinatubo was blamed for a two-year decrease in global temperature, changes in weather patterns, and damage to the ozone layer. The situation brings to mind a time now remembered as “The Year without a Summer,” a meteorological event that occurred 175 years earlier. At that time, harsh weather conditions plagued much of eastern North America and, to a lesser extent, northern Europe.
- 2 April 1816 brought typical spring weather to upstate New York and New England; trees budded, and farmers prepared to plow and plant. In May, however, the expected warm temperatures failed to arrive. Most people remained optimistic, waiting for the summer that was “just around the corner.” They waited in vain. During the first week of June, ten inches of snow fell on New England. Throughout the month, temperatures rarely rose above the 30s. Many farmers replanted crops several times, only to see them stunted or destroyed by sleet, hail, and icy winds. July and August brought little improvement. During most days the temperature stayed in the 40s. Farmers’ diaries document the farmers’ daily struggles with near-freezing temperatures, failing crops, and dying farm animals. The few crops that managed to survive were killed by frost in mid-September. Winter came early in New England and was unusually severe. Even the South was affected; on July 4, the high temperature for Savannah, Georgia, was only 46 degrees Fahrenheit!
- 3 Some religious leaders warned their congregations that the unusual weather meant that the end of the world was drawing near. Other leaders attributed the cool weather to unusual sunspot activity. The proliferation of the newly invented lightning rod was also blamed as some people believed that lightning rods had interrupted the natural temperature balance of Earth, causing the cooler temperatures.
- 4 It was not until October that the first plausible explanation for “The Year without a Summer” was suggested. Friedrich Bessel, a German astronomer, reported seeing thick clouds of dust in the upper atmosphere. He theorized that these dust particles screened portions of Earth from the warming rays of the sun. It was discovered that in April 1815, Mount Tambora, an Indonesian volcano, had erupted with such force that it had sent an estimated 100 cubic miles of fine dust into the atmosphere. Witnesses to the eruption reported that the sky remained dark for two days. The dust then rose high into the stratosphere, where it encircled the world for several years to come.
- 5 Skeptics in 1816 doubted that a faraway volcano could steal their summer. However, most present-day researchers believe Bessel’s explanation to be generally correct, demonstrating the global nature of weather. The dust in the atmosphere eventually settled, and the spring of 1817 was back to normal.

51. Which of the following best tells what this passage is about?

- A. the belief of some religious leaders that the end of the world was coming in 1816
- B. a summer of strange weather and its probable cause
- C. the importance of summer weather to agriculture in New England
- D. a comparison of the weather of 1816 and 1991

52. What is the most likely reason farmers persisted in replanting their crops?
- E. They believed that the cold weather could not continue all summer long.
  - F. They thought that crops would be able to survive even though the weather remained cold.
  - G. They believed that the improved weather conditions of July would last.
  - H. They thought the June snowfalls would provide needed moisture.
53. In the winter that followed the summer of 1816, New Englanders most likely experienced
- A. new weather events that they had not encountered before.
  - B. temperatures that were warmer than usual for that time of year.
  - C. shortages of fruits, vegetables, and other essential crops.
  - D. difficulty adjusting to a different timeline for planting crops.
54. How does paragraph 3 contribute to the passage?
- E. It presents the most probable cause of the 1816 weather.
  - F. It shows how nineteenth-century people explained the 1816 weather.
  - G. It presents a theory about the 1816 weather that some skeptics doubted.
  - H. It includes eyewitness reports to describe the source of the 1816 weather.
55. The author includes the details in paragraph 4 about the eruption of Mount Tambora in order to
- A. suggest that the aftermath of the eruption still affects the environment today.
  - B. highlight the severe impact that the eruption had on the atmosphere.
  - C. provide a description of what happens during a volcanic eruption.
  - D. emphasize how differently people perceive natural events in various parts of the world.



- 56.** Which of the following is implied by the phrase “the global nature of weather” (paragraph 5)?
- E.** Understanding weather events around the world is important for making weather predictions.
  - F.** Extreme weather conditions in some parts of the world can have a lasting impact on a geographical area.
  - G.** Natural disasters tend to occur in different parts of the world at the same time.
  - H.** Conditions in one part of the world can affect weather in another part of the world.
- 57.** The cold summer of 1816 was most likely caused by
- A.** unusual sunspot activity.
  - B.** the excessive use of lightning rods.
  - C.** damage to the ozone layer.
  - D.** an increase of dust in the atmosphere.

CONTINUE ON TO THE NEXT PAGE ►

# PART 2 — MATHEMATICS

57 QUESTIONS

## IMPORTANT NOTES


- (1) Formulas and definitions of mathematical terms and symbols are **not** provided.
  - (2) Diagrams other than graphs are **not** necessarily drawn to scale. Do not assume any relationship in a diagram unless it is specifically stated or can be figured out from the information given.
  - (3) Assume that a diagram is in one plane unless the question specifically states that it is not.
  - (4) Graphs are drawn to scale. Unless stated otherwise, you can assume relationships according to appearance. For example, (on a graph) lines that appear to be parallel can be assumed to be parallel; likewise for concurrent lines, straight lines, collinear points, right angles, etc.
  - (5) Reduce (simplify) all fractions to lowest terms.
-

# GRID-IN QUESTIONS

## QUESTIONS 58–62

**DIRECTIONS:** Solve each question. On the answer sheet, write your answer in the boxes at the top of the grid. Start on the left side of each grid. Print only one number or symbol in each box. Under each box, fill in the circle that matches the number or symbol you wrote above. **DO NOT FILL IN A CIRCLE UNDER AN UNUSED BOX. DO NOT LEAVE A BOX BLANK IN THE MIDDLE OF AN ANSWER.**

58.



In the figure above, PQRS is a parallelogram. What is the value of  $x$ ?

59. The owner of a tree farm plants pine trees and oak trees in a ratio of 8:3. How many oak trees are planted if 264 pine trees are planted?

60. For what value of  $w$  is  $4w = 2w - 8$ ?

61. A survey asked students what pets they have. Based on the results, the following statements are all true.

- 20 students have cats.
- 23 students have dogs.
- 3 students have both dogs and cats.
- 5 students have no dogs or cats.

How many students were surveyed?

62. The sum of two consecutive integers is  $-15$ . If 1 is added to the smaller integer and 2 is subtracted from the larger integer, what is the **product** of the two resulting integers?

---

# MULTIPLE CHOICE QUESTIONS

## QUESTIONS 63–114

**DIRECTIONS:** Solve each question. Select the best answer from the choices given. Mark the letter of your answer on the answer sheet. When you are solving questions, you can write in the test booklet or on the scrap paper given to you.

---

- 63.** The set of possible values of  $m$  is  $\{5, 7, 9\}$ .  
What is the set of possible values of  $k$  if  
 $2k = m + 3$ ?

A.  $\{3, 4, 5\}$   
B.  $\{4, 5, 6\}$   
C.  $\{8, 10, 12\}$   
D.  $\{10, 14, 18\}$

---

- 64.**  $7 + (3n + 6) - (4n + 8) =$

E.  $5 - n$   
F.  $5 + n$   
G.  $21 - n$   
H.  $21 + n$

---

- 65.** In a certain school, course grades range from 0 to 100. Adrianna took 4 courses and her mean course grade was 90. Roberto took 5 courses. If both students have the same sum of course grades, what was Roberto's mean?

A. 72  
B. 80  
C. 90  
D. 92

- 66.** Jenny starts a game with twice as many marbles as Keiko. Jenny gives Keiko 5 marbles, but she still has 10 more than Keiko. How many marbles did Jenny have to start with?

E. 25  
F. 30  
G. 35  
H. 40

---

- 67.** In a scale diagram, 0.125 inch represents 125 feet. How many inches represent 1 foot?

A. 0.001  
B. 0.01  
C. 0.1  
D. 0.12

68.

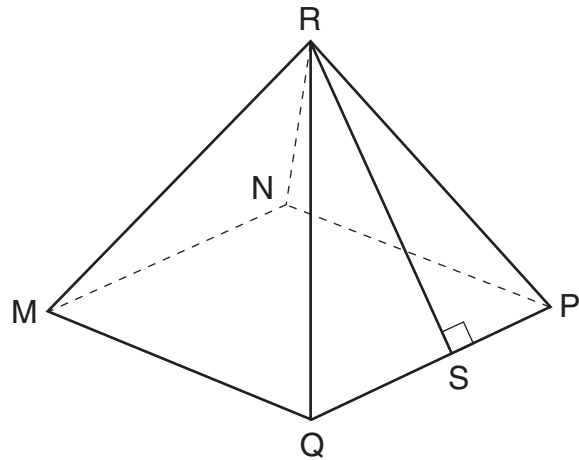
PEOPLE PER VEHICLE AT CHECKPOINT

Number of People in Vehicle	Percent of Vehicles
1	40%
2	35%
3	15%
4	7%
5 or more	3%

A researcher recorded the number of people in each vehicle that passed through a checkpoint. The table above shows the percent distribution for the 420 vehicles that passed through the checkpoint yesterday morning. How many of the 420 vehicles contained **at least** 3 people?

- E. 42
- F. 63
- G. 105
- H. 315

69.



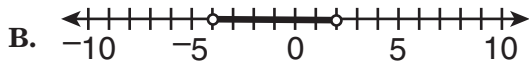
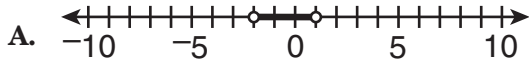
In the pyramid above, each triangular face has the same area, and the base  $MNPQ$  is a square that measures 8 centimeters on each side. If the length of  $\overline{RS} = 6$  centimeters, what is the surface area of the pyramid **excluding** the base?

- A. 48 sq cm
- B. 96 sq cm
- C. 128 sq cm
- D. 160 sq cm

70. The perimeter of a rectangle is 510 centimeters. The ratio of the length to the width is 3:2. What are the dimensions of this rectangle?

- E. 150 cm by 105 cm
- F. 153 cm by 102 cm
- G. 158 cm by 97 cm
- H. 165 cm by 90 cm

71. Which number line below shows the solution to the inequality  $-4 < \frac{x}{2} < 2$ ?



72. 1 dollar = 7 lorgs  
1 dollar = 0.5 dalt

Kevin has 140 lorgs and 16 dalts. If he exchanges the lorgs and dalts for dollars according to the rates above, how many dollars will he receive?

- E. \$28  
F. \$52  
G. \$182  
H. \$282

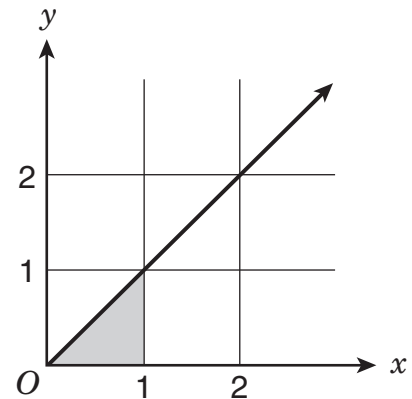
73. A box of colored pencils contains exactly 6 red pencils. The probability of choosing a red pencil from the box is  $\frac{2}{7}$ . How many of the pencils in the box are **not** red?

- A. 5  
B. 15  
C. 21  
D. 30

74. The sum of the numbers  $x$ ,  $y$ , and  $z$  is 50. The ratio of  $x$  to  $y$  is 1:4, and the ratio of  $y$  to  $z$  is 4:5. What is the value of  $y$ ?

- E. 4  
F. 8  
G. 10  
H. 20

- 75.



What is the area of the shaded region in the graph above?

- A. 0.25 square unit  
B. 0.5 square unit  
C. 1 square unit  
D. 1.5 square units

76. In Centerville, 45% of the population is female, and 60% of the population commutes to work daily. Of the total Centerville population, 21% are females who commute to work daily. What percentage of the total Centerville population are males who do **not** commute to work daily?

- E. 15%  
F. 16%  
G. 24%  
H. 39%

77. Mrs. Cranston bought five bottles of water for \$0.90 each and 8 pounds of meat. She paid a total of \$26.90 for these items, not including tax. What was the price per pound of the meat?
- A. \$2.80  
 B. \$3.25  
 C. \$14.40  
 D. \$22.40

78. In a sample of 10 cards, 4 are red and 6 are blue. If 2 cards are selected at random from the sample, one at a time without replacement, what is the probability that both cards are **not** blue?
- E.  $\frac{2}{15}$   
 F.  $\frac{4}{25}$   
 G.  $\frac{3}{10}$   
 H.  $\frac{1}{3}$

79. 1 sind = 4 lorgs  
 2 plunks = 5 dalts  
 5 sinds = 2 harps  
 1 plunk = 3 harps

A nation has five types of coins: sinds, dalts, lorgs, harps, and plunks. The relationship between the coins is shown above. Which coin is most valuable?

- A. sind  
 B. dalt  
 C. harp  
 D. plunk

- 80.

SCORES ON MATH QUIZ

Score	Number of Students
85	4
75	4
65	2

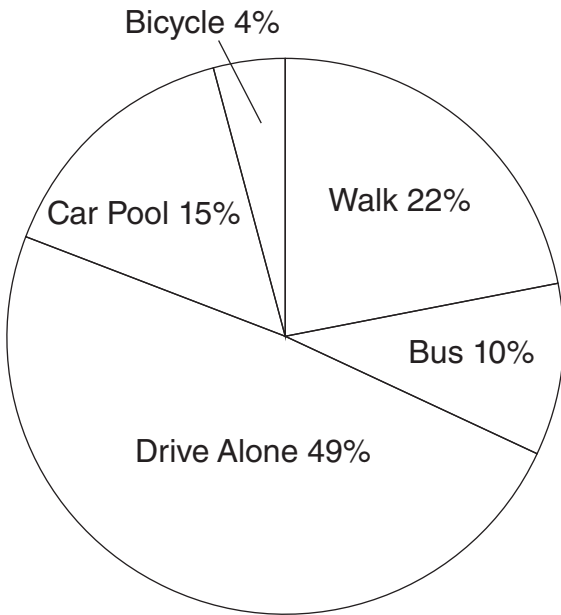
What is the mean score of the 10 students in the table above?

- E. 22.5  
 F. 75  
 G. 77  
 H. 85



81.

HOW PEOPLE GET TO WORK  
IN CENTER CITY



Total number of people  
working in Center City = 15,000

How many more people in Center City walk to  
work than ride their bicycle to work?

- A. 2,500
- B. 2,700
- C. 2,800
- D. 3,000

82. Which of the following numbers has factors  
that include the smallest factor (other than 1)  
of 91?

- E. 30
- F. 35
- G. 39
- H. 44

83. In a scale drawing of a triangular banner, one  
side measures 16 centimeters and the other  
two sides each measure 12 centimeters. On  
the actual banner, these two sides each  
measure 36 feet. What is the length of the  
remaining side of the actual banner?

- A. 16 ft
- B. 32 ft
- C. 40 ft
- D. 48 ft

84. The faculty of a certain four-year college  
consists of 179 teachers. There are  
663 first-year students. The student-to-faculty  
ratio for the entire college is 15 to 1. What is  
the total number of second-, third-, and  
fourth-year students?

- E. 1,989
- F. 2,022
- G. 2,652
- H. 2,685

85.

$$2\frac{1}{5} + 3\frac{3}{10} + 4\frac{2}{5} + 5\frac{1}{2}$$

What is the value of the expression shown  
above?

- A.  $14\frac{7}{20}$
- B.  $14\frac{2}{5}$
- C.  $15\frac{7}{20}$
- D.  $15\frac{2}{5}$

86. A car is traveling 55 miles per hour, and 1 mile = 5,280 feet. Which of the following calculations would give the car's speed in **feet per second**?

E.  $\frac{55 \cdot 5,280}{1}$

F.  $\frac{55 \cdot 5,280}{3,600}$

G.  $\frac{55 \cdot 3,600}{5,280}$

H.  $\frac{55 \cdot 5,280}{60}$

87. Today, Tien's age is  $\frac{1}{4}$  of Jordan's age. In 2 years, Tien's age will be  $\frac{1}{3}$  of Jordan's age. How old is Jordan today?

- A. 4 years old
- B. 6 years old
- C. 12 years old
- D. 16 years old

88. How many positive even factors of 48 are greater than 24 and less than 48?

- E. 0
- F. 1
- G. 2
- H. 12

89. The least of 5 consecutive integers is  $l$ , and the greatest is  $g$ . What is the value of  $\frac{l+g}{2}$  in terms of  $l$ ?

- A.  $2l$
- B.  $3l$
- C.  $l + 2$
- D.  $l + 5$

90. Johan leased a car for three years. He paid a one-time fee of \$1,000, and an additional \$300 per month for the full three years. At the end of the three years, what is the total amount Johan paid for leasing this car?

- E. \$1,900
- F. \$4,600
- G. \$10,800
- H. \$11,800

91. There are 6 different cookies on a plate. Aiden will choose 2 of these cookies to pack in his lunch. How many different pairs of 2 cookies can he choose from the 6?

- A. 12
- B. 15
- C. 30
- D. 36

92. For a presentation, Deion can create 5 slides in 20 minutes, working at a constant rate. Kyra can create 3 slides in 10 minutes, working at her own constant rate. What is the total number of slides the two of them can create in one hour?

- E. 16
- F. 30
- G. 33
- H. 55

93.



On the number line above,  $LN = \frac{1}{8}$ . Point M (not shown) is located between point L and point N. Which value below is a possible value for M?

- A. 4.26
- B. 4.31
- C. 4.35
- D. 4.58

94. An unmarked straight stick will be laid end over end to measure a distance of exactly 72 feet. The same stick will be used in the same way to measure a distance of exactly 30 feet. What is the length of the longest possible stick that can be used for both measurements?

- E. 3 ft
- F. 4 ft
- G. 6 ft
- H. 8 ft

95. Ryan must read 150 pages for school this weekend. It took him 30 minutes to read the first 20 pages. At this rate, how much **additional** time will it take him to finish the reading?

- A.  $2\frac{1}{6}$  hr
- B.  $3\frac{1}{4}$  hr
- C.  $3\frac{3}{4}$  hr
- D.  $7\frac{1}{2}$  hr

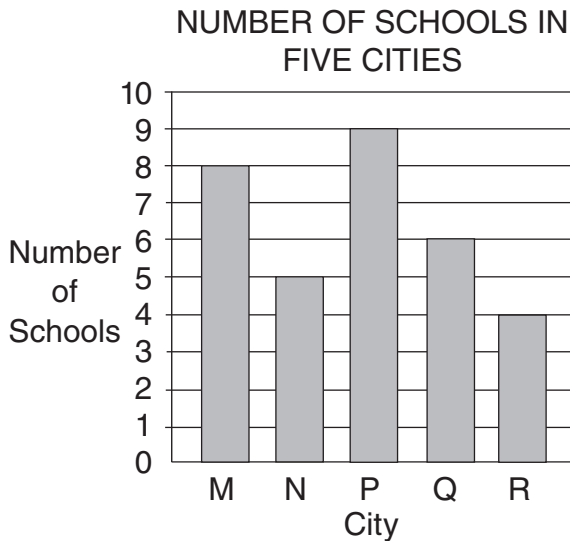
96. Suppose  $M = \frac{w}{x}$ ,  $N = \frac{y}{z}$ , and  $w, x, y,$  and  $z$  do not equal 0. What is  $\frac{M}{N}$  in terms of  $w, x, y,$  and  $z$ ?

- E.  $\frac{wx}{yz}$
- F.  $\frac{wy}{xz}$
- G.  $\frac{wz}{xy}$
- H.  $\frac{xy}{wz}$

97. In the set of consecutive integers from 12 to 30, inclusive, there are four integers that are multiples of both 2 and 3. How many integers in this set are multiples of **neither** 2 nor 3?

- A. 5
- B. 6
- C. 13
- D. 15

98.



The graph above shows the number of schools per city for five small cities. Cities M and N each have 500 students per school. City P has 400 students per school. Cities Q and R each have 700 students per school. Which of the five cities has the **greatest** number of students?

- E. City M
- F. City P
- G. City Q
- H. City R

99. A box contains 5 strawberry candies, 3 banana candies, and 2 orange candies. If Braden selects 2 candies at random from this box, without replacement, what is the probability that both candies are **not** banana?

- A.  $\frac{1}{15}$
- B.  $\frac{9}{100}$
- C.  $\frac{7}{15}$
- D.  $\frac{49}{100}$

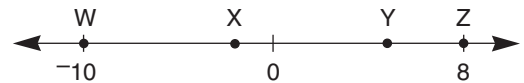
100.

$$\frac{w}{x} = \frac{y}{z}$$

In the equation above,  $w$ ,  $x$ ,  $y$ , and  $z$  are positive numbers. Which of these is equal to  $z$ ?

- E.  $x$
- F.  $xy$
- G.  $\frac{w}{xy}$
- H.  $\frac{xy}{w}$

101.



On the number line above, points W, X, Y, and Z are integers, and  $WX:XY:YZ = 4:2:3$ . What is the value of  $\overline{WY}$ ?

- A. 8
- B. 11
- C. 12
- D. 18

102. A metal square used in an electronic device must have a thickness of 0.02 inch, with an allowable error of 1 percent. What is the **greatest** allowable thickness of the metal square?

- E. 0.0002 in.
- F. 0.02 in.
- G. 0.0202 in.
- H. 0.03 in.

103.

SCORES ON BIOLOGY TEST

Section	Lowest Score	Range
I	65	28
II	62	25
III	67	22

Mr. Blake's biology class is divided into three sections. The same test was given to each section. The table above shows both the lowest score and the range of scores on this test for each section. What is the **overall** range of all scores in all three sections?

- A. 25
- B. 27
- C. 28
- D. 31

104. If  $3n$  is a positive even number, how many **odd** numbers are in the range from  $3n$  up to and including  $3n + 5$ ?

- E. 2
- F. 3
- G. 4
- H. 5

105. 
$$\frac{10}{13} = 0.\overline{769230}$$

In the infinitely repeating decimal above, 7 is the first digit in the repeating pattern. What is the 391st digit?

- A. 0
- B. 3
- C. 6
- D. 7

106. A car travels at 4,400 feet per minute. The radius of each tire on the car is 1 foot. How many revolutions does one of these tires make in 1 minute?

(Use the approximation  $\frac{22}{7}$  for  $\pi$ .)

- E. 700
- F. 1,925
- G. 13,828
- H. 15,400

107.  $100(2 + 0.1)^2 - 100 =$

- A. 101
- B. 200
- C. 301
- D. 341

108. A sports store has a container of handballs: 4 blue, 5 red, 8 yellow, 9 white, and 11 green. If one ball is picked from the container at random, what is the probability that it will be yellow?

- E.  $\frac{1}{37}$
- F.  $\frac{1}{8}$
- G.  $\frac{8}{37}$
- H.  $\frac{8}{29}$

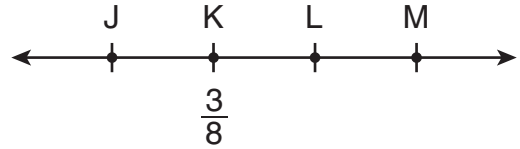
109. Each week, Leon has fixed expenses of \$1,250 at his furniture shop. It costs him \$150 to make a chair in his shop, and he sells each chair for \$275. What is Leon's **profit** if he makes and sells 25 chairs in 1 week?

- A. \$1,875
- B. \$2,500
- C. \$3,125
- D. \$4,375

110. Using the approximation 2.54 centimeters = 1 inch, how many centimeters are in 4 feet 7 inches?

- E. 21.65
- F. 119.38
- G. 121.92
- H. 139.70

111.



On the number line above,  $JK = 3\frac{1}{2}$ ,  $JM = 9\frac{3}{4}$ , and  $LM = 1\frac{1}{8}$ . What is the position of point L?

- A.  $5\frac{1}{8}$
- B.  $5\frac{1}{4}$
- C.  $5\frac{1}{2}$
- D.  $6\frac{1}{4}$

112. If  $4x - 3y = 12$ , what is  $x$  in terms of  $y$ ?

- E.  $x = \frac{3}{4}y + 12$
- F.  $x = -\frac{3}{4}y + 12$
- G.  $x = \frac{3}{4}y + 3$
- H.  $x = -\frac{3}{4}y + 3$

113.

SERVINGS OF FRUITS AND VEGETABLES

Number of Servings of Fruits and Vegetables	Number of Students
0	5
1	7
2	3
3	4
4	0
5	1

There are 20 students in a class. The frequency table above shows the number of students in this class who ate 0, 1, 2, 3, 4, or 5 servings of fruits and vegetables yesterday. What is the mean number of servings of fruits and vegetables eaten yesterday per student in this class?

- A.  $1\frac{1}{2}$
- B. 3
- C.  $3\frac{1}{3}$
- D. 4

114. A paste used to cover a billboard is made by mixing the following ingredients by weight: 4 parts powder, 3 parts water, 2 parts resin, and 1 part hardener. To cover one billboard requires 30 pounds of this paste. How many total pounds of resin are required to cover 4 billboards?

- E. 6
- F. 8
- G. 24
- H. 48